







Name: _____



Find the Area of Each Rectangle (C)

Directions: Find the area of each of the following rectangles.

*Figures not drawn to scale.

<p>6 cm</p>  <p>4 cm</p> <input type="text"/>	<p>9 cm</p>  <p>9 cm</p> <input type="text"/>
<p>3 cm</p>  <p>7 cm</p> <input type="text"/>	<p>11 cm</p>  <p>5 cm</p> <input type="text"/>
<p>12 cm</p>  <p>1 cm</p> <input type="text"/>	<p>9 cm</p>  <p>8 cm</p> <input type="text"/>

ANSWER KEY

*Figures not drawn to scale.

