



















Name: _____

Practice with Pictographs (C)

Directions: Use the pictograph below to answer the questions that follow.

Laps Ran Around the Track

Giuseppe										
Rocco										
Matteo										
Alberto										

 = 1 lap around the track

- 1.) Which student ran the *most* laps? _____
- 2.) Which student ran the *fewest* laps? _____
- 3.) Which student ran exactly four laps? _____
- 4.) How many more laps did Alberto run than Giuseppe? _____
- 5.) How many total laps did Rocco and Alberto run combined?

ANSWER KEY

- 1.) Rocco**
- 2.) Matteo**
- 3.) Giuseppe**
- 4.) 3 more laps**
- 5.) 13 total laps**